

NEXT STATION

CLIL BOOK
Ana Elisa Martins



2nd Edition




UNIT 1

NUMBERS EVERYWHERE


Circle the numbers.



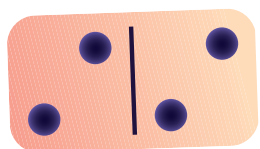





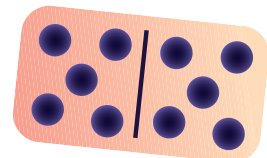
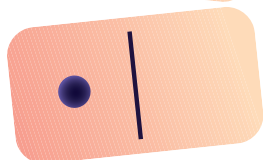

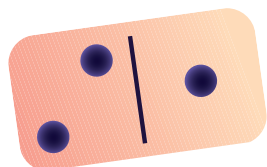




UNIT 1



1 Match and say.



1

2

3

4

5

6

7



8

9

10



2 Listen and color.



1 **2** **3** **4** **5** **6** **7** **8** **9** **10**

This is counting by 1s 2s 5s

3 Write and count.



123

My name

<input type="text"/>	<input type="text"/>	<input type="text"/>	<input type="text"/>	<input type="text"/>	<input type="text"/>	<input type="text"/>	<input type="text"/>	<input type="text"/>	<input type="text"/>
----------------------	----------------------	----------------------	----------------------	----------------------	----------------------	----------------------	----------------------	----------------------	----------------------

Friend 1

<input type="text"/>	<input type="text"/>	<input type="text"/>	<input type="text"/>	<input type="text"/>	<input type="text"/>	<input type="text"/>	<input type="text"/>	<input type="text"/>	<input type="text"/>
----------------------	----------------------	----------------------	----------------------	----------------------	----------------------	----------------------	----------------------	----------------------	----------------------

Friend 2

<input type="text"/>	<input type="text"/>	<input type="text"/>	<input type="text"/>	<input type="text"/>	<input type="text"/>	<input type="text"/>	<input type="text"/>	<input type="text"/>	<input type="text"/>
----------------------	----------------------	----------------------	----------------------	----------------------	----------------------	----------------------	----------------------	----------------------	----------------------

Who has the longest name?

Me

Friend 1


Friend 2

GLOSSARY



longest





4 Count and write.

123



●	●	●		

--

●	●	●	●	●

--

●	●	●	●	●
●	●	●		

--

●	●	●	●	●
●	●	●	●	●

--

5 Draw and say.



2					

4					

7					

9					

UNIT 1

6 Circle the numbers.



7 Draw.



Niko is turning 6. Let's celebrate!

Place: 628 Lincoln Street.

Date: Saturday, June 9th.

Time: 5 p.m.

1 cake

8 balloons

5 kids

Niko's Birthday Party

GLOSSARY



balloon



cake



kids